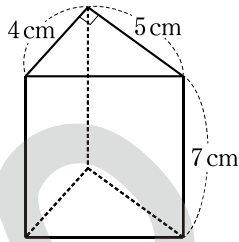
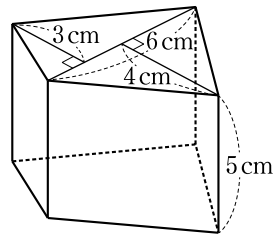


1 次の立体の体積を求めなさい。

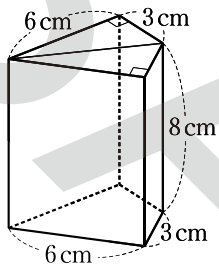
□(1) 三角柱



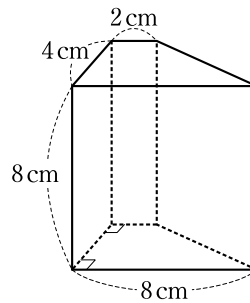
□(2) 四角柱



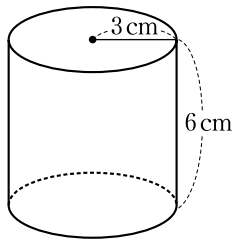
□(3) 四角柱



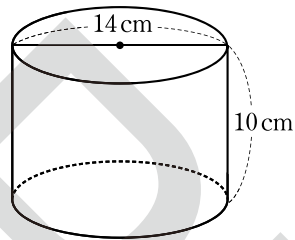
□(4) 四角柱



□(5) 円柱

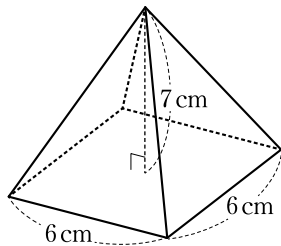


□(6) 円柱

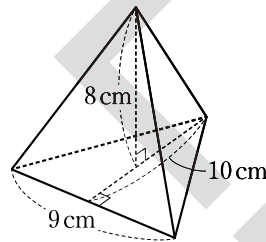


2 次の立体の体積を求めなさい。

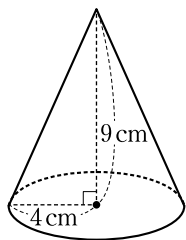
□(1) 正四角錐



□(2) 三角錐



□(3) 円錐



□(4) 円錐

